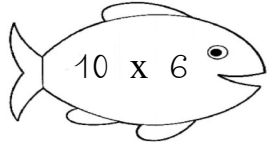
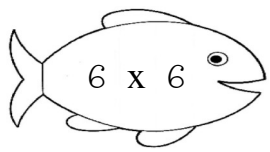

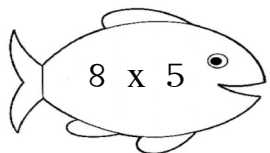
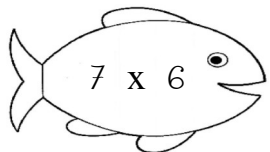

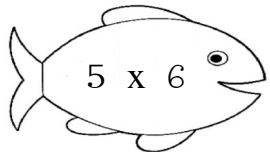

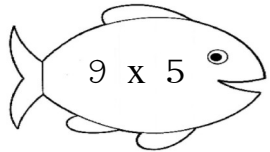
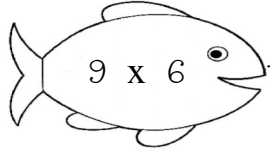
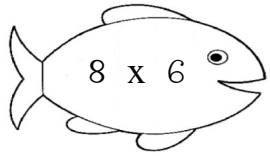


Mathématiques

1) Aide chaque poisson à rejoindre son bocal qui a le résultat correct :



2) Colorie le nombre de cases correct puis écris le résultat :

$7 \times 7 = \dots$

$9 \times 7 = \dots$

$6 \times 7 = \dots$

$8 \times 7 = \dots$