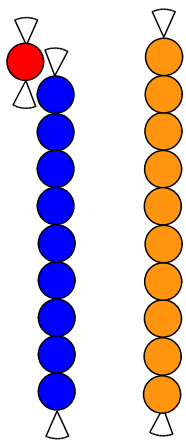
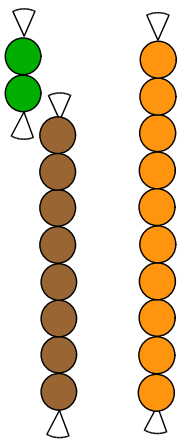


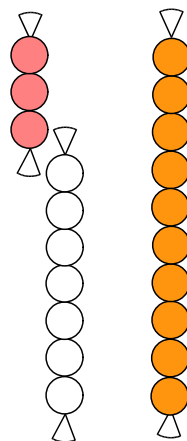
Les compléments à 10



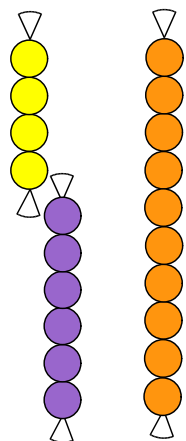
$$1 + 9 = 10$$



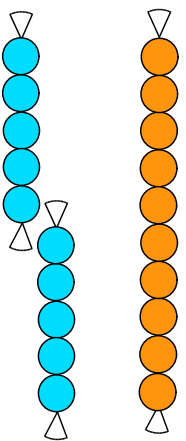
$$2 + 8 = 10$$



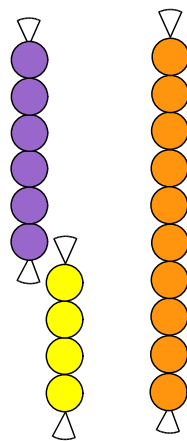
$$3 + 7 = 10$$



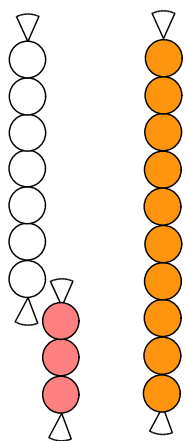
$$4 + 6 = 10$$



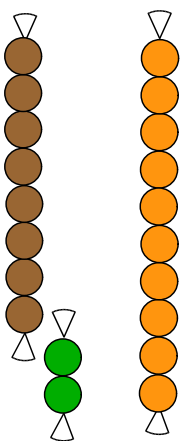
$$5 + 5 = 10$$



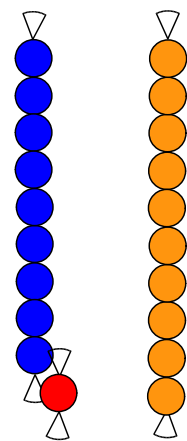
$$6 + 4 = 10$$



$$7 + 3 = 10$$



$$8 + 2 = 10$$



$$9 + 1 = 10$$