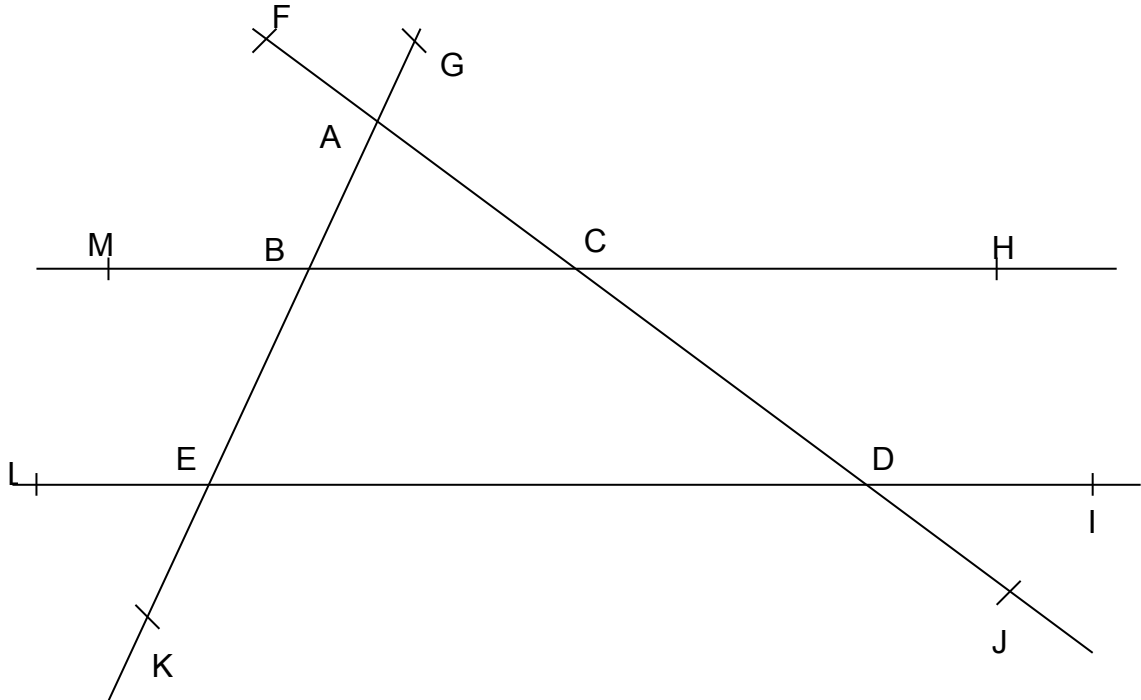



Exercice 16(G) : Je reconnais les angles.**5°4**

Cite toutes les paires d'angles : **1.** opposés par le sommet ;
2. correspondants ;
3. alternes-internes ;

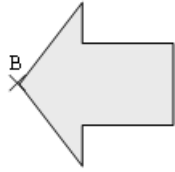


1. Construis un triangle NOP tel que : $NO = 6 \text{ cm}$, $OP = 7 \text{ cm}$ et $\widehat{NOP} = 60^\circ$.



M
x

I
x



A
x

D
x

C
x