


1. Dictée de nombres.

a	b	c	d	e	f	g	h	i	j
.....

2. Dessine comme Patti.

4



6



9



10



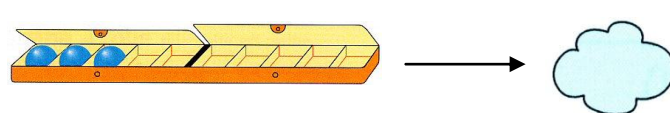
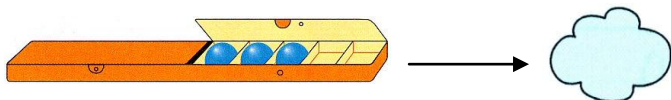
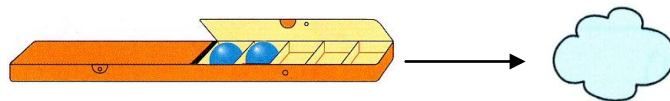
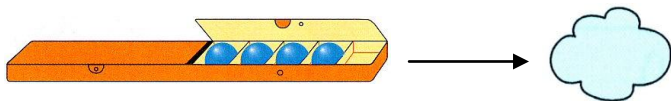
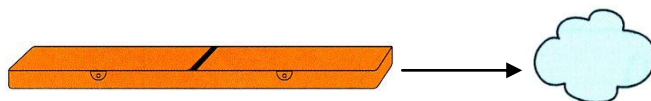
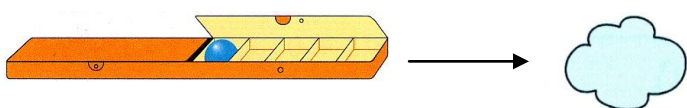
13



15



3. Ecris le nombre de billes dans la boîte.



1. Additions mentales

a	b	c	d	e	f
.....

2. Imagine la boîte et calcule.



5 + 4 =

7 + 2 =

2 + 4 =

1 + 6 =

3 + 4 =

5 + 2 =

8 + 1 =

3 + 7 =

5 + 5 =

4 + 4 =

9 + 1 =

6 + 3 =

3. Complète les maisons le plus d'égalités.

4	5	6

4. Complète.

5

/ \

3 +

3

/ \

2 +

4

/ \

2 +

6

/ \

4 +

Prénom :

Date :


1. Soustractions mentales

a	b	c	d	e	f
.....


2. Imagine les points et calcule.

$4 - 1 = \dots$ $5 - 3 = \dots$ $3 - 2 = \dots$ $4 - 3 = \dots$
 $2 - 1 = \dots$ $3 - 3 = \dots$ $4 - 2 = \dots$ $5 - 1 = \dots$

3. Relie l'araignée aux mouches avec ta règle.



4. Combien faut-il donner à Minibille ?



Prénom :

Date :