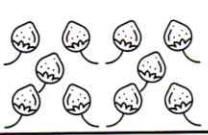
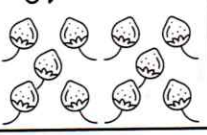

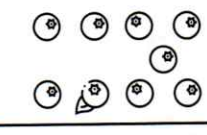


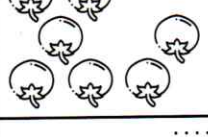

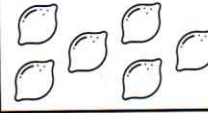
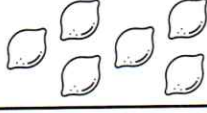


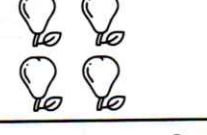
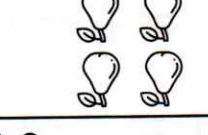
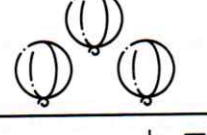
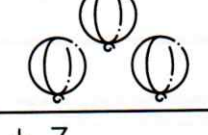
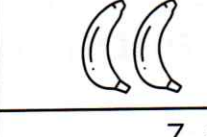







Trace avec la règle.

	$10 + 0 = \dots$	
	$8 = \dots + \dots$	
	$6 = \dots + \dots$	
	$7 + 7 = \dots$	
	$6 + 6 = \dots$	


	$\dots + \dots = 10$	
	$8 = \dots + \dots$	
	$3 + \dots = 6$	
	$2 + \dots = 4$	
	$1 + 1 = 2$	

Complète.




Connaitre les doubles jusqu'à 10 + 10

Je sais que le double d'un nombre est égal à deux fois ce nombre.



Samy a 3 pommes.



Lola en a le double.

Lola a deux fois 3 pommes.

$$3 + 3 = 6$$

Lola a 6 pommes.

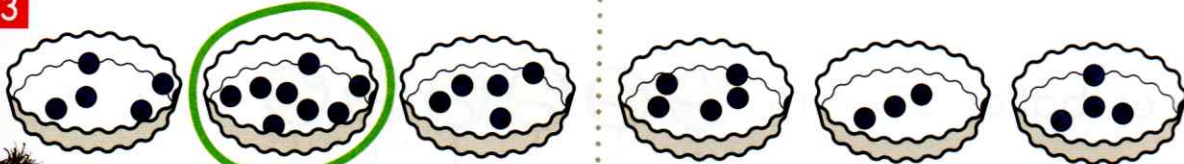


Écris le double de chaque nombre.

2

5 → 10	1 →	4 →	10 →
9 →	6 →	3 →	8 →

Entoure le bon plat puis complète.

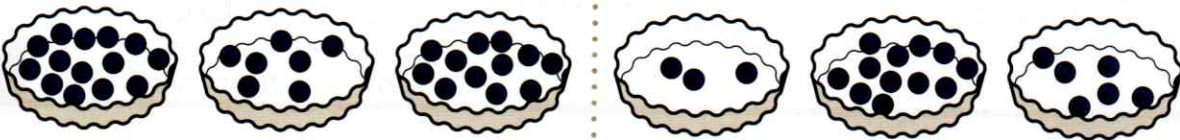


$4 + 4 = 8$

$2 + 2 = \dots$

Le double de 4 est 8.

Le double de 2 est



$7 + 7 = \dots$

$6 + 6 = \dots$

Le double de 7 est

Le double de 6 est

4 Lola a 6 ans. L'âge de Timéo est le double de celui de Lola. Quel âge a Timéo?

Je calcule.


Timéo a ans.

5 Sami a 9 billes dans sa poche droite et 9 billes dans sa poche gauche. Combien a-t-il de billes en tout?

Je calcule.

Sami a billes.

Relie.



- 43
- 39
- 58
- 56
- 66
- 74
- 71
- 84