

J'écris:

11

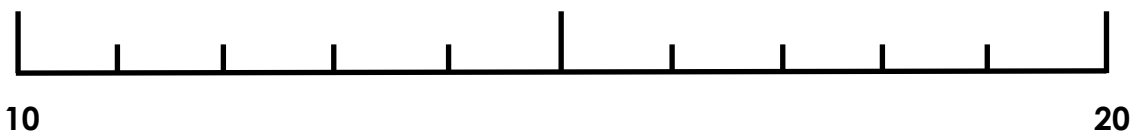
onze

11

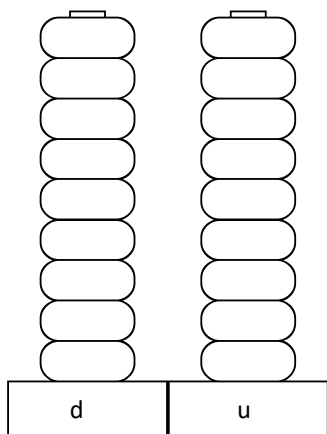
Je décompose:

$$11 = \dots\dots\dots + \dots\dots\dots$$

Je place:



Je colorie:



Je construis:

J'écris:

12

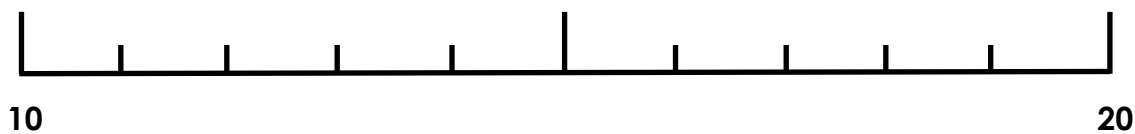
douze

12

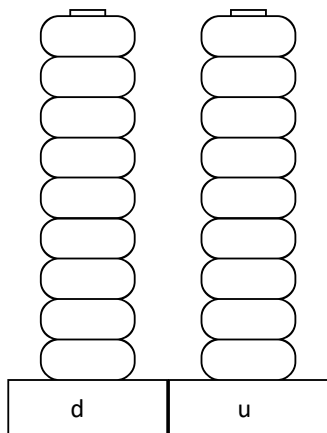
Je décompose:

$$12 = \dots\dots\dots + \dots\dots\dots$$

Je place:



Je colorie:



Je construis:

J'écris:

13

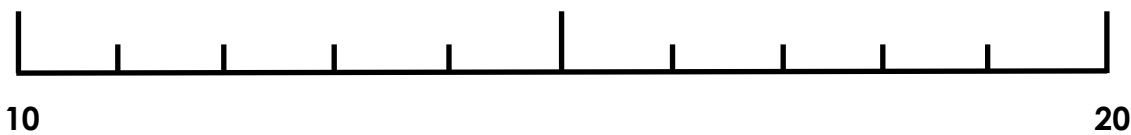
treize

13

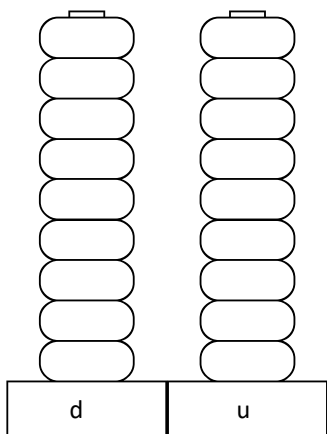
Je décompose:

$$13 = \dots\dots\dots + \dots\dots\dots$$

Je place:



Je colorie:



Je construis:

J'écris:

14

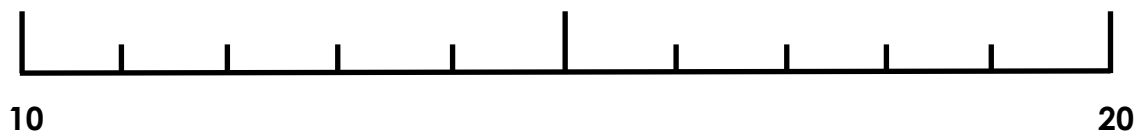
quatorze

14

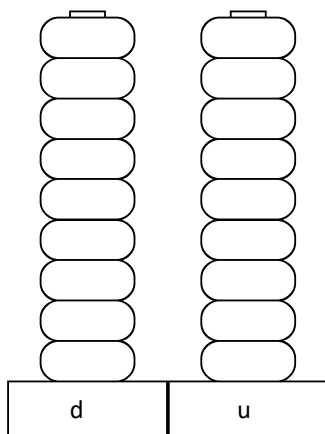
Je décompose:

$$14 = \dots\dots\dots + \dots\dots\dots$$

Je place:



Je colorie:



Je construis:

J'écris:

15

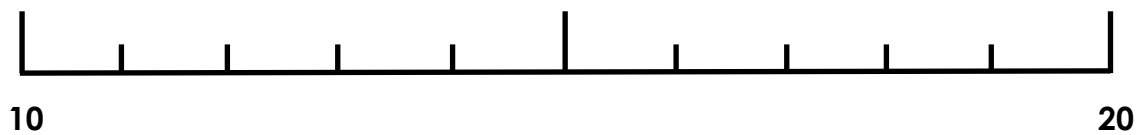
quinze

15

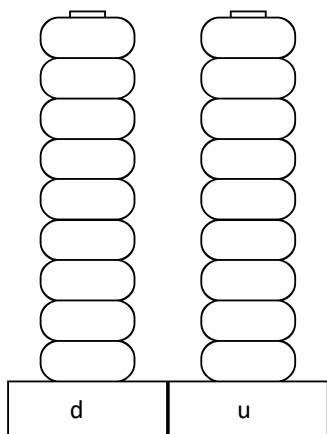
Je décompose:

$$15 = \dots\dots\dots + \dots\dots\dots$$

Je place:



Je colorie:



Je construis:

J'écris:

16

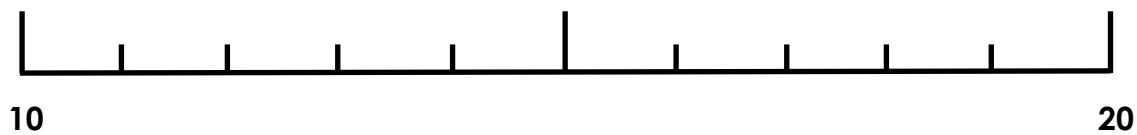
seize

16

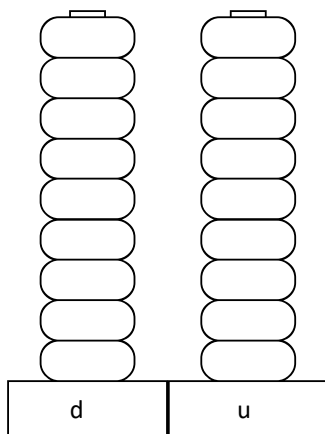
Je décompose:

$$16 = \dots\dots\dots + \dots\dots\dots$$

Je place:



Je colorie:



Je construis: