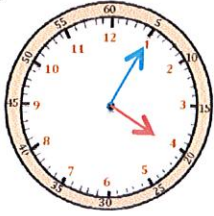




Mesures

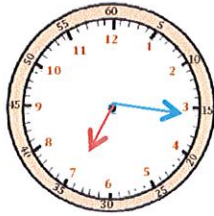
Les heures

1 J'écris les heures du matin et de l'après-midi.



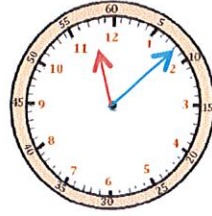
Il est ___ h ___ min.

Il est ___ h ___ min.



Il est ___ h ___ min.

Il est ___ h ___ min.



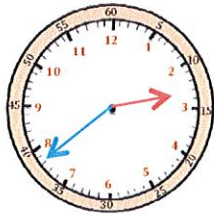
Il est ___ h ___ min.

Il est ___ h ___ min.



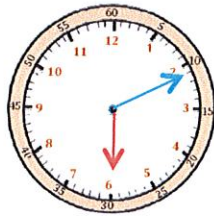
Il est ___ h ___ min.

Il est ___ h ___ min.



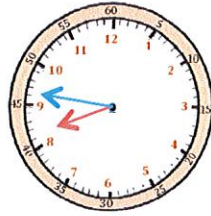
Il est ___ h ___ min.

Il est ___ h ___ min.



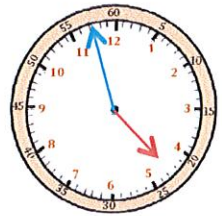
Il est ___ h ___ min.

Il est ___ h ___ min.



Il est ___ h ___ min.

Il est ___ h ___ min.

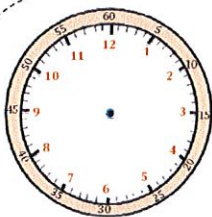


Il est ___ h ___ min.

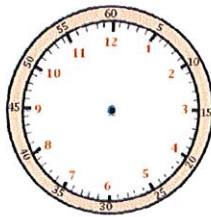
Il est ___ h ___ min.



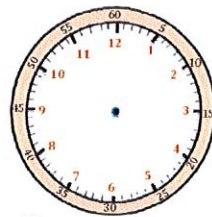
2 Je place les aiguilles selon les heures indiquées. (heures en rouge, minutes en bleu)



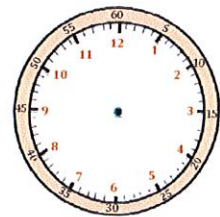
Il est 21 h 14 min.



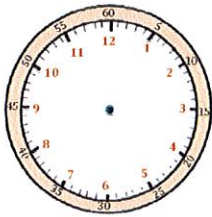
Il est 9 h 38 min.



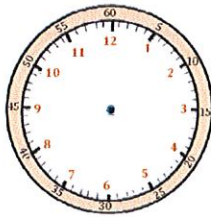
Il est 14 h 22 min.



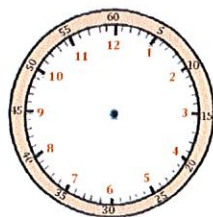
Il est 15 h 03 min.



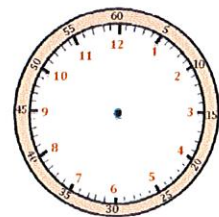
Il est 16 h 55 min.



Il est 23 h 35 min.



Il est minuit 20 min.



Il est 7 h 45 min.