

Séquence 12 - Séance 3

1

Ecris chaque somme d'argent en euros.

300 C = 3 €

100 C =

200 C =

500 C =

400 C =

800 C =

150 C = 100 C + 50 C = 1 € 50 C

185 C =

299 C =

305 C =

575 C =

2


Calcule le prix des objets.




..... € C



..... € C



..... € C



..... € C



Séquence 12 - Séance 3

1

Ecris chaque somme d'argent en euros.

300 C = 3 €

100 C =

200 C =

500 C =

400 C =

800 C =

150 C = 100 C + 50 C = 1 € 50 C

185 C =

299 C =

305 C =

575 C =

2

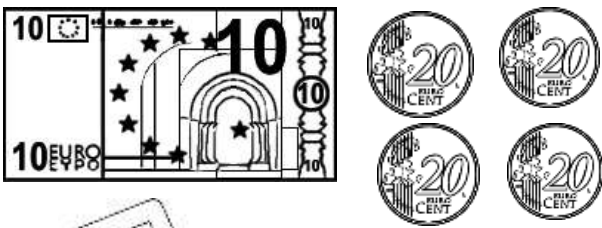
Calcule le prix des objets.




..... € C



..... € C



..... € C



..... € C

