

Rituels en autonomie : Jeudi 30 Avril

A) Pose et calcule les opérations suivantes.

367 + 183 + 297

| | | | | |
|-------|--|---|---|---|
| | | ② | ① | |
| | | 3 | 6 | 7 |
| + | | 1 | 8 | 3 |
| + | | 2 | 9 | 7 |
| <hr/> | | | | |
| | | 8 | 4 | 7 |

933 - 92

| | | | | |
|-------|--|---|---|---|
| | | 9 | 3 | 3 |
| - | | ① | 9 | 2 |
| <hr/> | | | | |
| | | 8 | 4 | 1 |

86 x 4

| | | | | |
|-------|--|---|---|---|
| | | ② | | |
| | | 8 | 6 | |
| x | | | 4 | |
| <hr/> | | | | |
| | | 3 | 4 | 4 |

49 x 5

| | | | | |
|-------|--|---|---|---|
| | | ④ | | |
| | | 4 | 9 | |
| x | | | 5 | |
| <hr/> | | | | |
| | | 2 | 4 | 5 |

71 + 4 + 9

| | | | | |
|-------|--|---|---|--|
| | | ① | | |
| | | 7 | 1 | |
| + | | | 4 | |
| + | | | 9 | |
| <hr/> | | | | |
| | | 8 | 4 | |

802 - 63

| | | | | |
|-------|--|---|---|---|
| | | 8 | 0 | 2 |
| - | | ① | ① | ① |
| | | ① | ① | ① |
| | | ① | ① | ① |
| <hr/> | | | | |
| | | 7 | 3 | 9 |

551 - 97

| | | | | |
|-------|--|---|---|---|
| | | 5 | 5 | 1 |
| - | | ① | ① | ① |
| | | ① | ① | ① |
| | | ① | ① | ① |
| <hr/> | | | | |
| | | 4 | 5 | 4 |

77 x 3

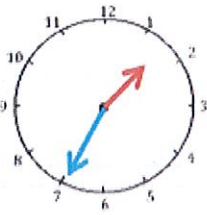
| | | | | |
|-------|--|---|---|---|
| | | ② | | |
| | | 7 | 7 | |
| x | | | 3 | |
| <hr/> | | | | |
| | | 2 | 3 | 1 |

9 + 904 + 46

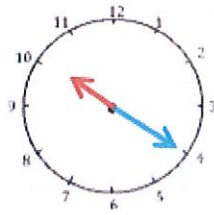
| | | | | |
|-------|--|---|---|---|
| | | ① | | |
| | | 9 | | |
| + | | 9 | 0 | 4 |
| + | | | 4 | 6 |
| <hr/> | | | | |
| | | 9 | 5 | 9 |

B) Ecris l'heure.

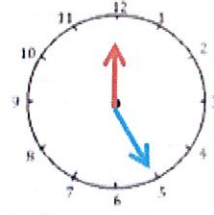
1 Ecris l'heure du matin .



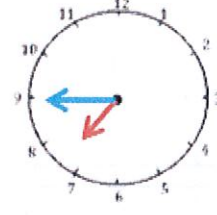
1.h.35min



10.h.20min

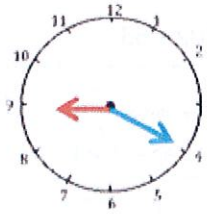


12.h.25min

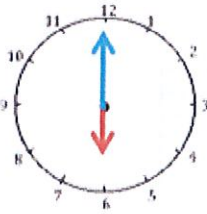


7.h.45min

3 Ecris l'heure de l'après midi .



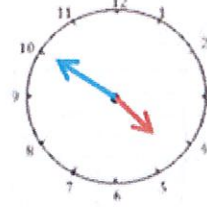
2.h.20min



12.h.00min



3.h.15min



6.h.50min