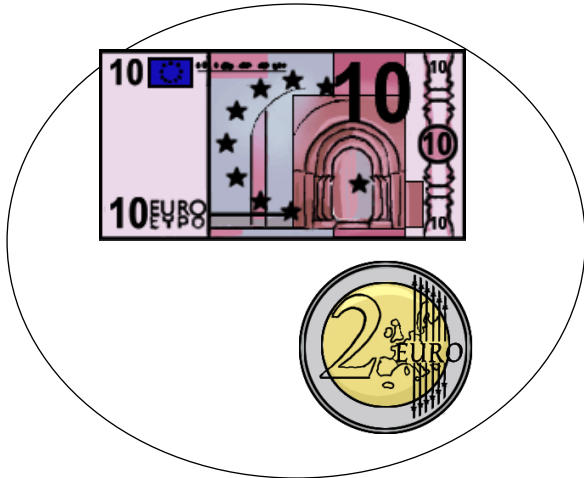
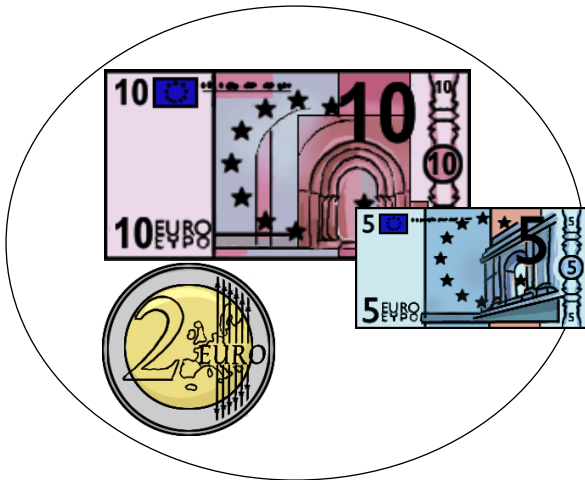


Observe chaque porte monnaie et trouve combien d'argent il manque pour acheter le nouveau CD à 20 euros.



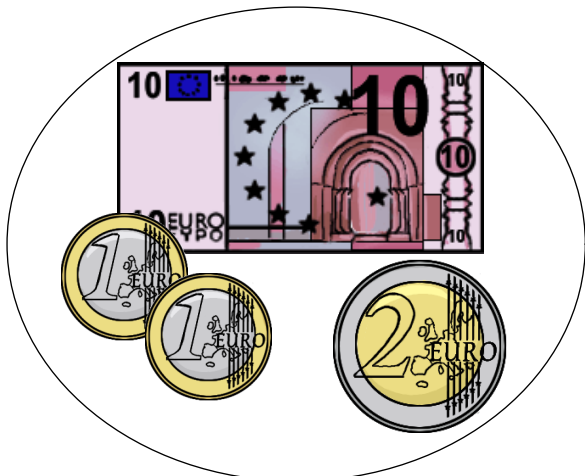
$$12 \quad \dots\dots\dots = 20$$

Il me manque $\dots\dots\dots$ euros.



$$\dots\dots\dots \quad \dots\dots\dots = 20$$

Il me manque $\dots\dots\dots$ euros.



$$\dots\dots\dots \quad \dots\dots\dots = 20$$

Il me manque $\dots\dots\dots$ euros.